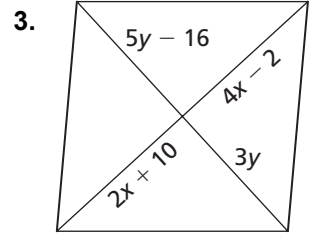
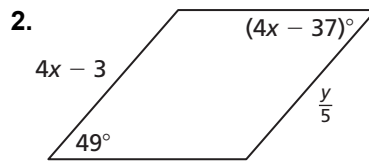
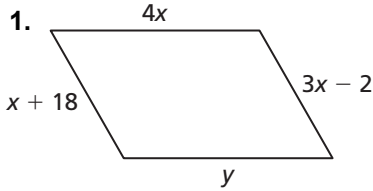


**7.2** Notetaking with Vocabulary (continued)

**Extra Practice**

In Exercises 1–3, find the value of each variable in the parallelogram.



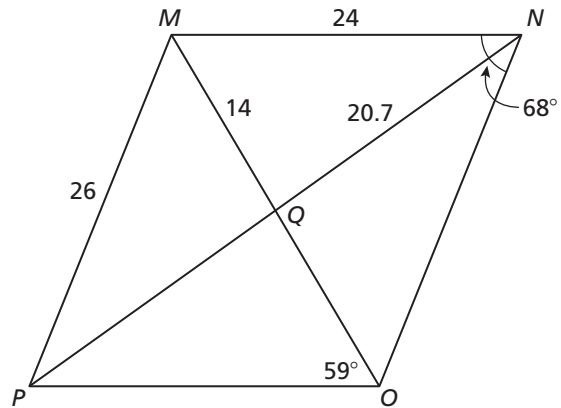
In Exercises 4–11, find the indicated measure in  $\square MNOP$ . Explain your reasoning.

4.  $PO$

5.  $OQ$

6.  $NO$

7.  $PQ$



8.  $m\angle PMN$

9.  $m\angle NOP$

10.  $m\angle OPM$

11.  $m\angle NMO$