

10.3 Notetaking with Vocabulary (continued)

Extra Practice

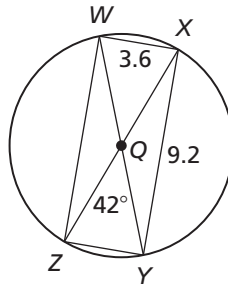
In Exercises 1–4, find the measure of the arc or chord in $\odot Q$.

1. $m\widehat{WX}$

2. YZ

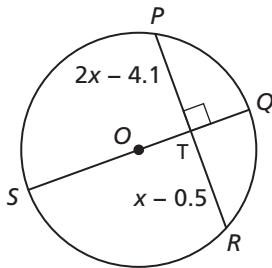
3. WZ

4. $m\widehat{XY}$

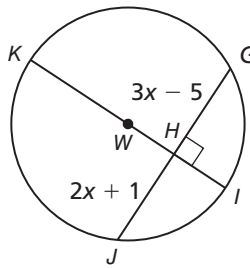


In Exercises 5 and 6, find the value of x .

5.

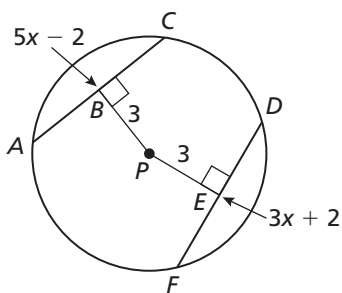


6.



In Exercises 7 and 8, find the radius of the circle.

7.



8.

