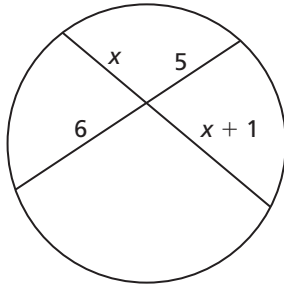


10.6 Notetaking with Vocabulary (continued)

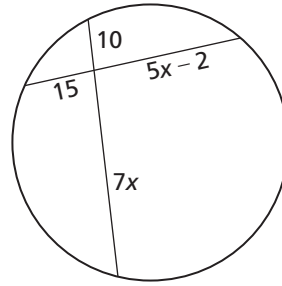
Extra Practice

In Exercises 1–4, find the value of x .

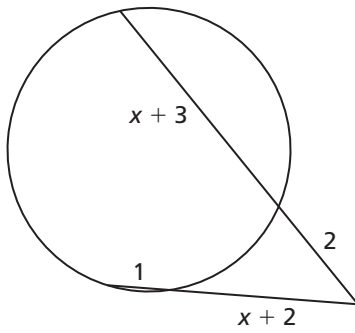
1.



2.



3.



4.

