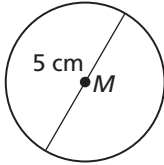


11.2 Notetaking with Vocabulary (continued)

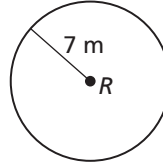
Extra Practice

In Exercises 1–8, find the indicated measure.

1. area of $\odot M$



2. area of $\odot R$



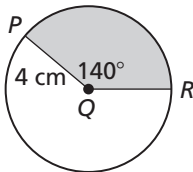
3. area of a circle with a diameter of 1.8 inches

4. diameter of a circle with an area of 10 square feet

5. radius of a circle with an area of 65 square centimeters

6. area of a circle with a radius of 6.1 yards

7. areas of the sectors formed by $\angle PQR$



8. area of $\odot Y$

