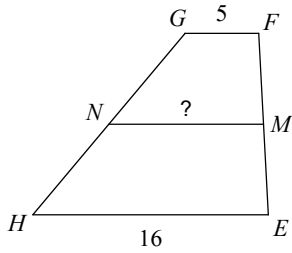


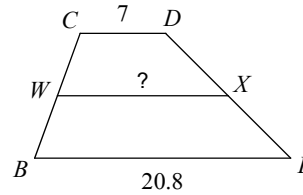
Assignment

Find the length of the midsegment of each trapezoid.

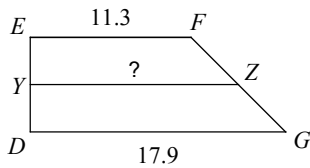
1)



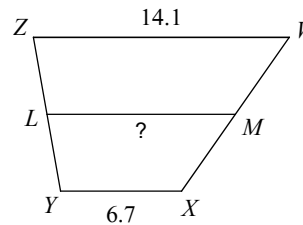
2)



3)

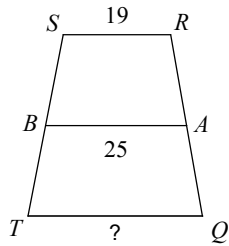


4)

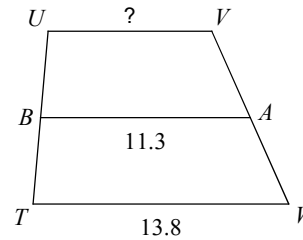


Given the shown midsegment and values, find the length of the base indicated for each trapezoid.

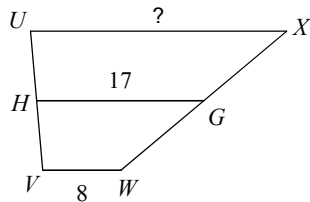
5)



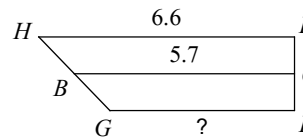
6)



7)

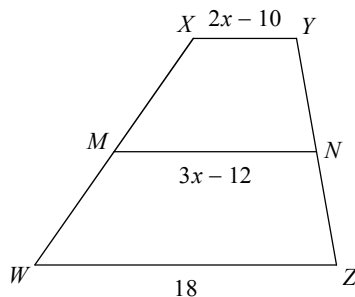


8)



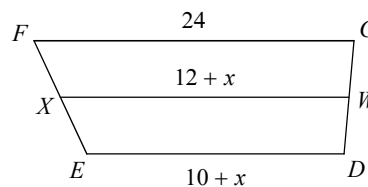
Find the length of the midsegment of the trapezoid.

9)



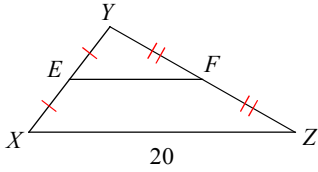
Find the length of the base indicated for the trapezoid with the given midsegment.

10) Find DE

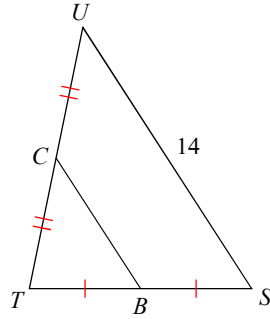


Find the missing length indicated for each triangle.

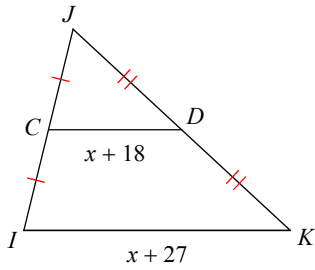
11) Find  $EF$



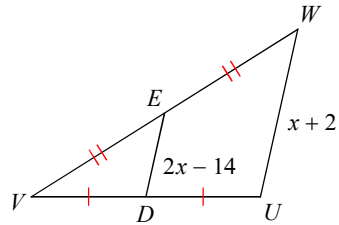
12) Find  $BC$



13) Find  $IK$

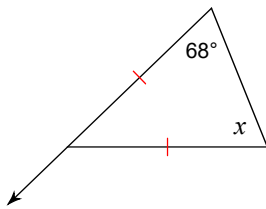


14) Find  $UW$

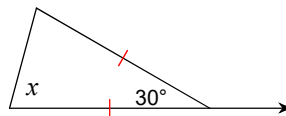


**REVIEW:** For each figure, find the measure of angle  $x$ .

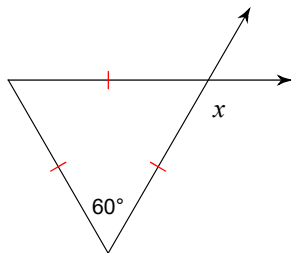
15)



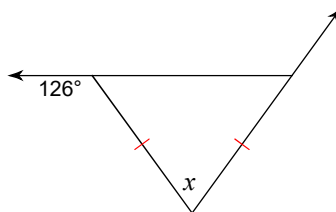
16)



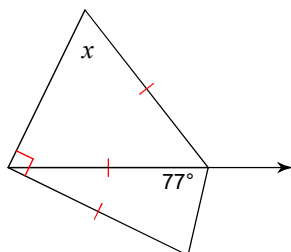
17)



18)



19)



20)

