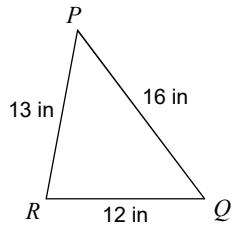


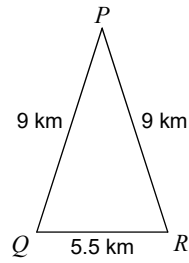
Assignment

Find the area of each triangle. Round your answers to the nearest tenth.

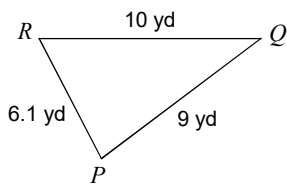
1)



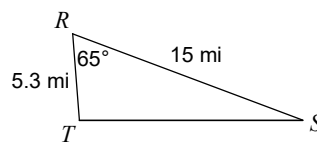
2)



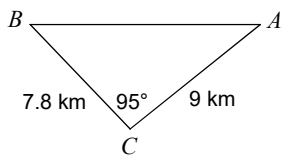
3)



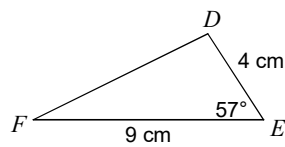
4)



5)



6)



7) In  $\triangle STR$ ,  $t = 8$  in,  $s = 16$  in,  $r = 11$  in

8) In  $\triangle BCA$ ,  $c = 10$  ft,  $a = 6$  ft,  $m\angle B = 46^\circ$